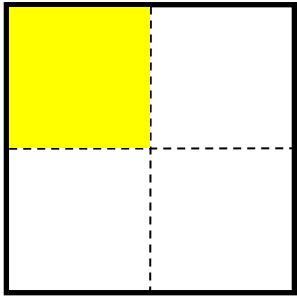
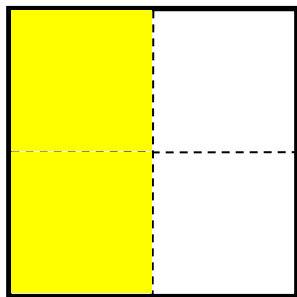


# FRACTIONS

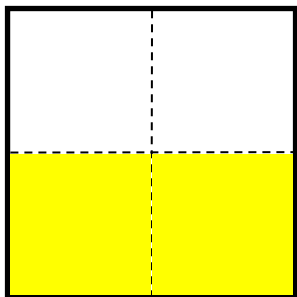
WHAT FRACTION DOES THE COLORED AREA SHOW?



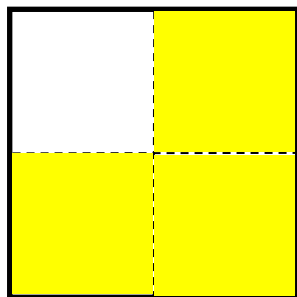
- $\frac{1}{4}$       $\frac{2}{3}$       $\frac{1}{5}$       $\frac{2}{4}$



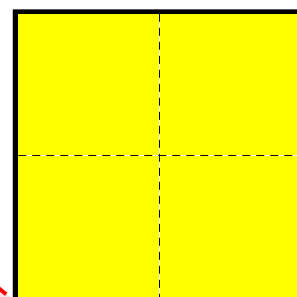
- $\frac{1}{3}$       $\frac{2}{4}$       $\frac{4}{4}$       $\frac{2}{5}$



- $\frac{2}{4}$       $\frac{2}{5}$       $\frac{1}{1}$       $\frac{3}{4}$



- $\frac{2}{3}$       $\frac{1}{2}$       $\frac{3}{4}$       $\frac{4}{4}$



- $\frac{1}{5}$       $\frac{4}{4}$       $\frac{3}{4}$       $\frac{2}{3}$

