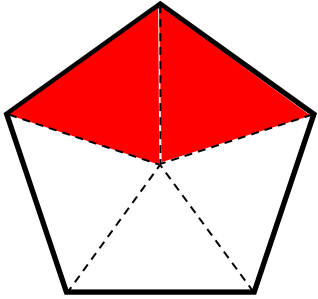
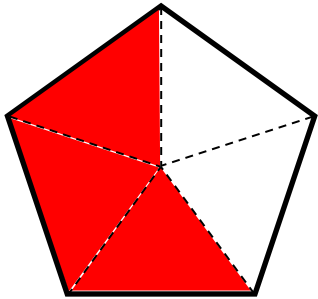


FRACTIONS

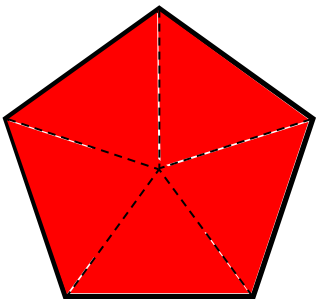
WHAT FRACTION DOES THE COLORED AREA SHOW?



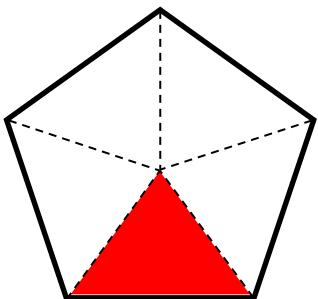
- $\frac{1}{5}$ $\frac{3}{3}$ $\frac{2}{5}$ $\frac{2}{4}$



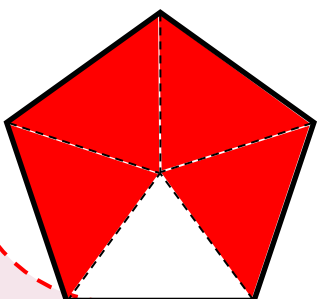
- $\frac{3}{5}$ $\frac{1}{4}$ $\frac{3}{4}$ $\frac{3}{6}$



- $\frac{2}{4}$ $\frac{5}{5}$ $\frac{1}{5}$ $\frac{3}{7}$



- $\frac{2}{6}$ $\frac{1}{2}$ $\frac{1}{4}$ $\frac{1}{5}$



- $\frac{4}{6}$ $\frac{4}{5}$ $\frac{3}{3}$ $\frac{2}{3}$

