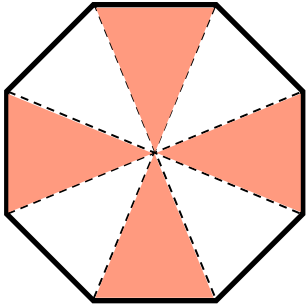


FRACTIONS

WHAT FRACTION DOES THE COLORED AREA SHOW?

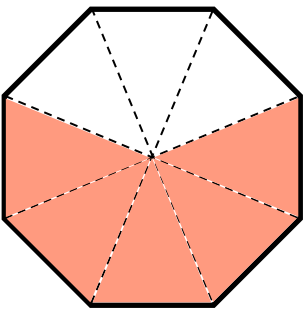


$\frac{4}{7}$

$\frac{1}{8}$

$\frac{3}{7}$

$\frac{4}{8}$

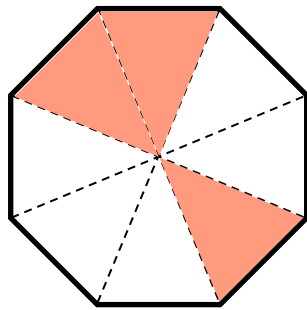


$\frac{3}{8}$

$\frac{5}{8}$

$\frac{5}{7}$

$\frac{3}{7}$

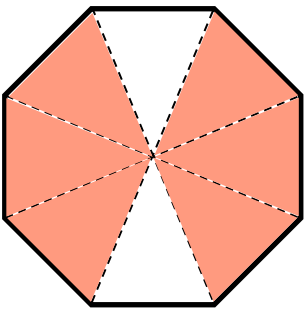


$\frac{3}{8}$

$\frac{2}{6}$

$\frac{3}{7}$

$\frac{5}{8}$

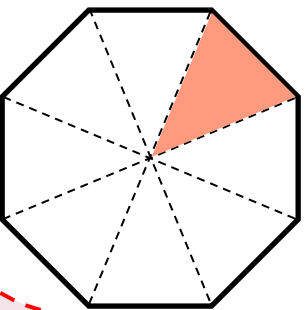


$\frac{6}{7}$

$\frac{4}{6}$

$\frac{6}{8}$

$\frac{2}{8}$



$\frac{1}{7}$

$\frac{1}{8}$

$\frac{3}{7}$

$\frac{7}{8}$

