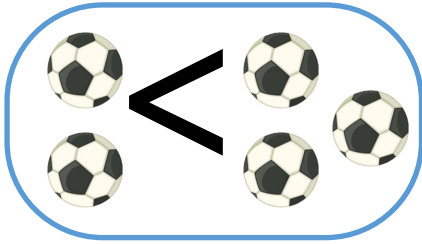
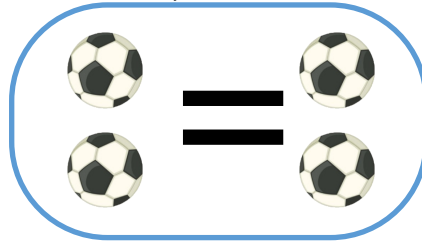


# KINDERGARDEN MATH

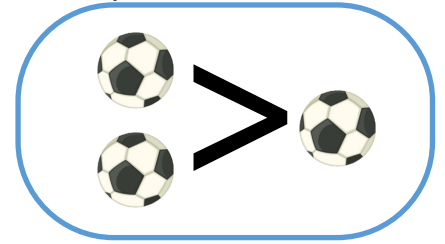
Less than



Equal to



Greater than



Place the correct sign in the boxes below!

1  4

6  5

5  8

5  5

1  9

8  7

7  8

9  0

4  4

3  2

4  6

2  4

6  4

9  7

6  6

3  7

8  3

7  9