

PICTURE ANALOGIES

Find the relation between the first two pictures and mark the answer option related to the third picture.

1



A



B




C



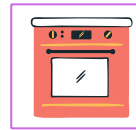
D



2




A




B




C



D



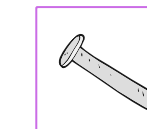
3



A



B



C



D

