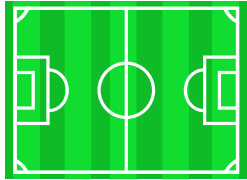
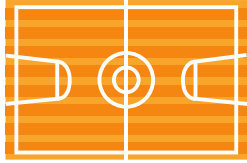


PICTURE ANALOGIES

Find the relation between the first two pictures and mark the answer option related to the third picture.

1



A



B





C




D



2



A




B



C



D



3



A



B



C



D

