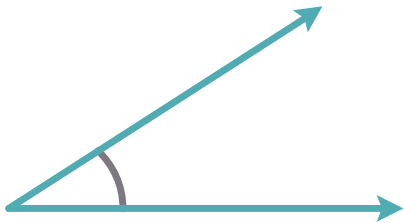


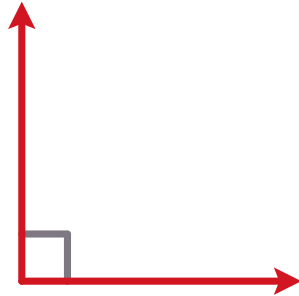
# Types of Angles

Fill in the blanks with the correct degrees.



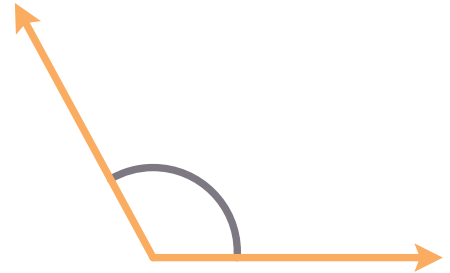
**ACUTE ANGLE**

Less than .....<sup>o</sup>



**RIGHT ANGLE**

Exact .....<sup>o</sup>




**OBTUSE ANGLE**

Greater than .....<sup>o</sup>  
but less than .....<sup>o</sup>




**STRAIGHT ANGLE**

Exact .....<sup>o</sup>



**REFLEX ANGLE**

Greater than .....<sup>o</sup>  
but less than .....<sup>o</sup>



**FULL ANGLE**

Exact .....<sup>o</sup>

